

Name: _____ Period: _____ Number: OD- _____



Directions: Your mission is to answer the questions about the map which is located on the back of this sheet so that a young, Mr. O'Donnell age 10, can get safely from the library to his house. If you fail he may never be able to grow up and turn into a social studies teacher.

Write the letter and number of the square the following are located in:

Library _____

The O'Donnell's _____

School _____

Most of the house with the boy eating dog _____

Pepperoni's Pizza _____

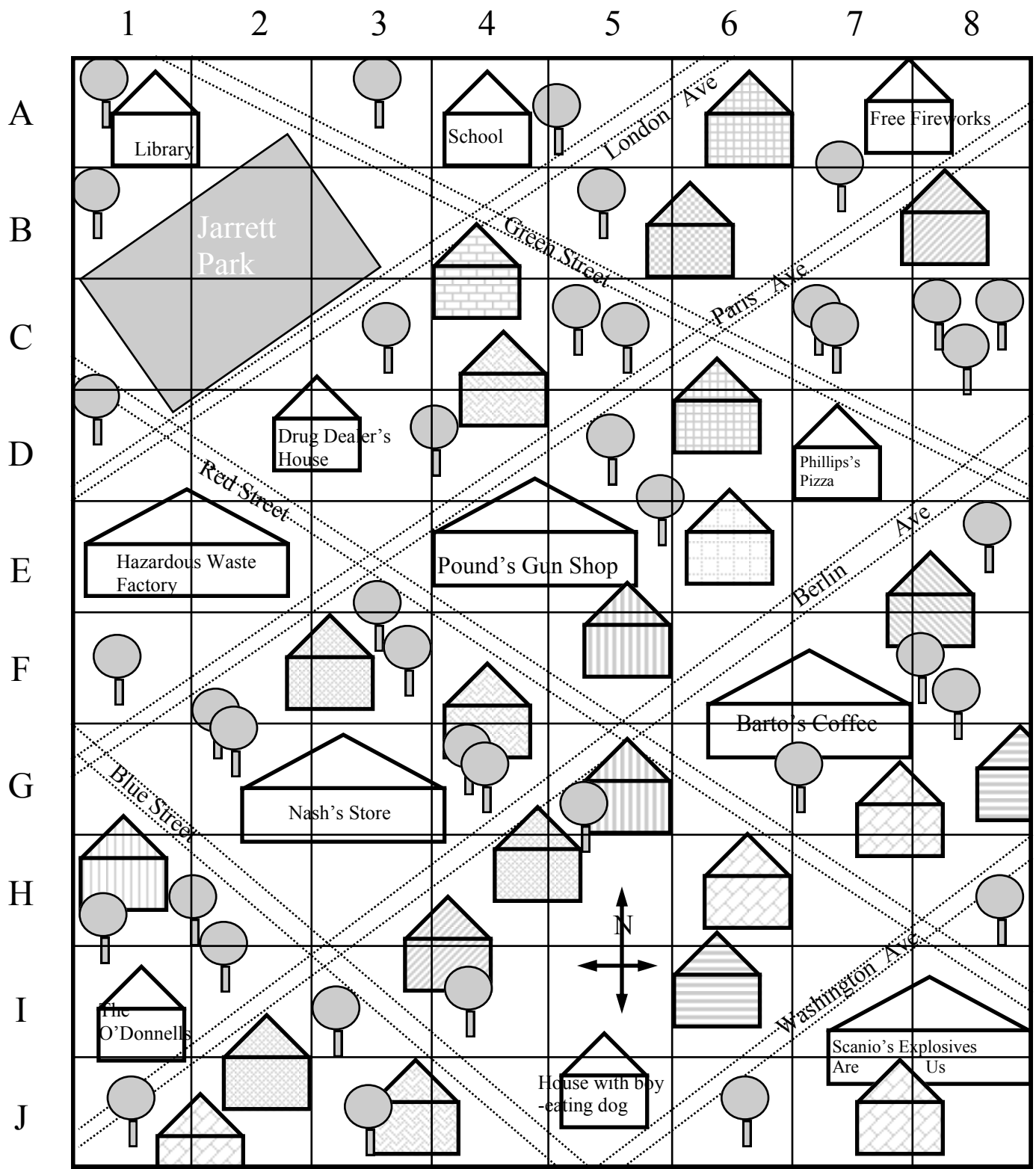
The square with the most trees _____

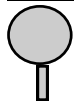
What street runs parallel to Washington Ave but is North West of it?


In which squares is the Compass Rose located?

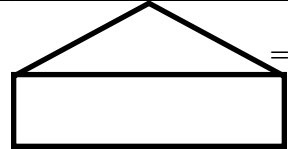
Where is the Key for the map located?

Write directions so that young Mr. O'Donnell can get safely home from the Library. Remember he needs to travel by roads since his mother won't let him cut through peoples yards. Also be mindful to keep him away from dangerous places.



 = Tree

 = House/Building

 = Factory/Store